

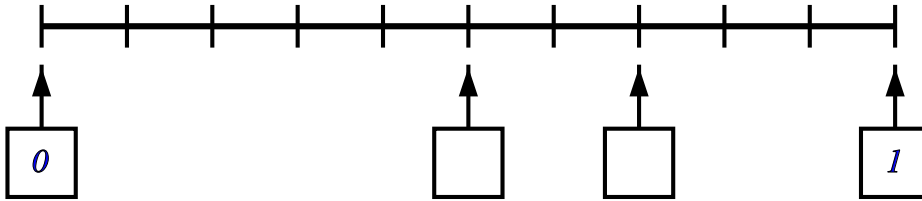
Number line - decimals

Name: _____ Class: _____ Date: _____

Mark / 12 %

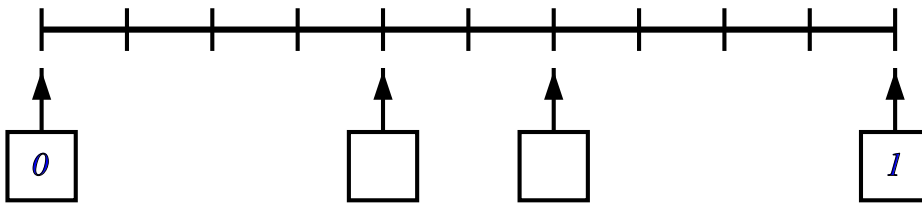
1) Write in the missing numbers

[1]



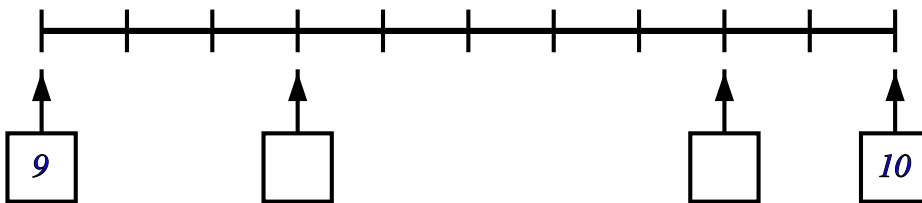
2) Write in the missing numbers

[1]



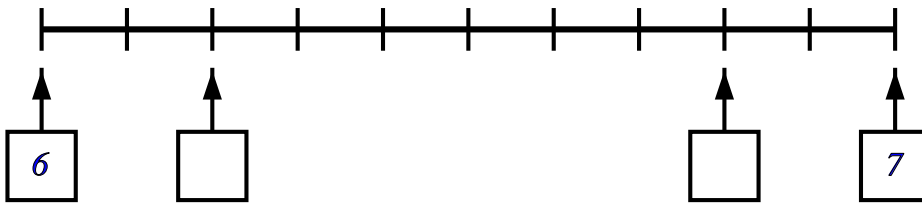
3) Write in the missing numbers

[1]



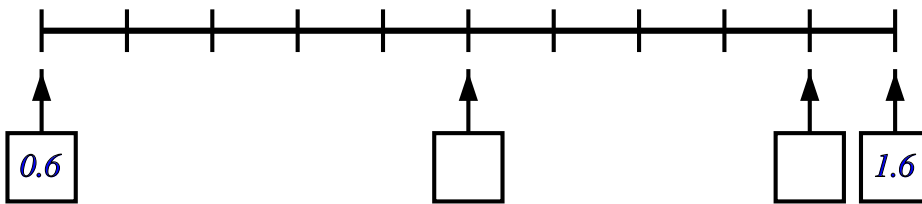
4) Write in the missing numbers

[1]



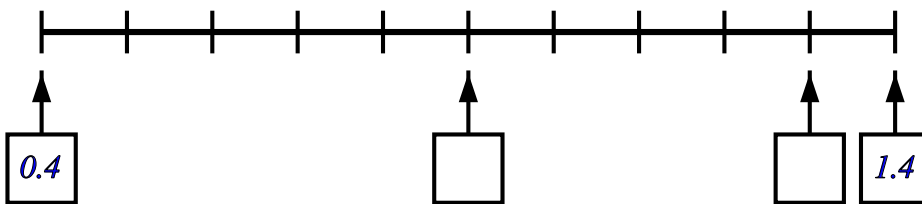
5) Write in the missing numbers

[1]



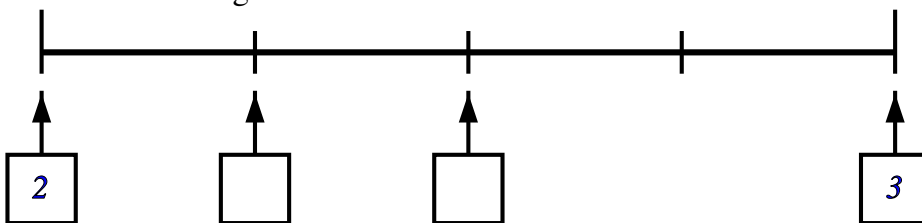
6) Write in the missing numbers

[1]



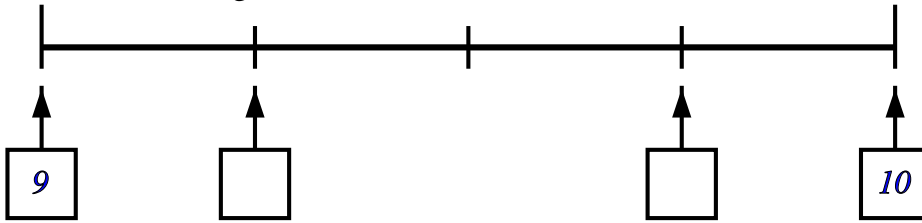
7) Write in the missing numbers

[1]



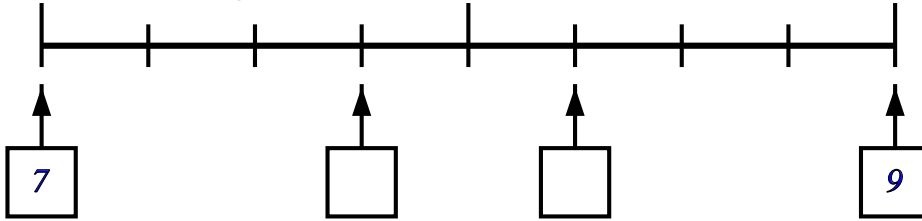
8) Write in the missing numbers

[1]



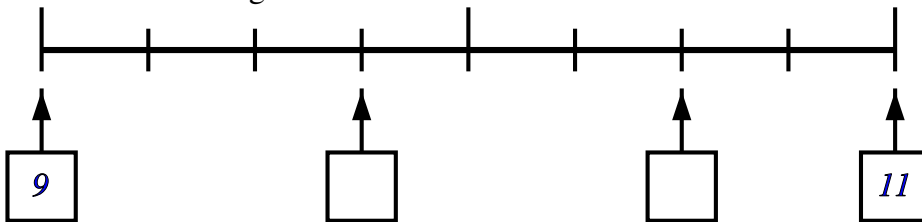
9) Write in the missing numbers

[1]



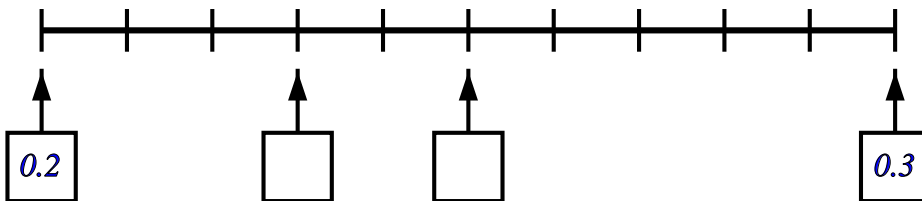
10) Write in the missing numbers

[1]



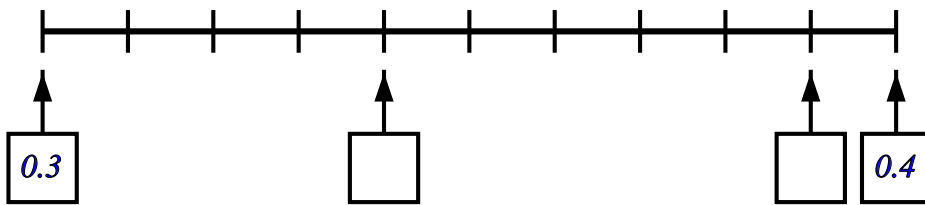
11) Write in the missing numbers

[1]



12) Write in the missing numbers

[1]



Solutions for the assessment Number line - decimals

1) missing numbers are 0.5 and 0.7

2) missing numbers are 0.4 and 0.6

3) missing numbers are 9.3 and 9.8

4) missing numbers are 6.2 and 6.8

5) missing numbers are 1.1 and 1.5

6) missing numbers are 0.9 and 1.3

7) missing numbers are 2.25 and 2.5

8) missing numbers are 9.25 and 9.75

9) missing numbers are 7.75 and 8.25

10) missing numbers are 9.75 and 10.5

11) missing numbers are 0.23 and 0.25

12) missing numbers are 0.34 and 0.39